




1) $84 \div (-14)$

Answer: _____

2)  Find area of rectangle having sides $a = 95$ cm and $b = 94$ cm

Answer: _____

3) Find the next three numbers in the sequence
4,5,10,11,22,23,46 __, __, __

Answer: _____

4) A number was shared in the ratio 5:15. The smaller share was 15. What was the total amount shared?

Answer: _____

5) A number was shared in the ratio 5:15. The smaller share was 15. What was the total amount shared?


Answer: _____

6) 4 x 1000


Answer: _____

7) $5 \frac{2}{10} - 2 \frac{1}{10}$

Answer: _____

8)  Measure angle boa

Answer: _____

9)  Find Volume of Cone

Answer: _____

10) 01:00 am To 11:30 am

Answer: _____

11) $6 \times (-25)$

Answer: _____

12) 2.5×23.6

Answer: _____

13) $\frac{7^{20} / 7^9}{7^6}$

Answer: _____

14) Find the next three numbers in the sequence
4, 0, 0, -4, -4, -8, -8, __, __, __

Answer: _____

15) $4\frac{1}{1} - 13\frac{7}{8}$

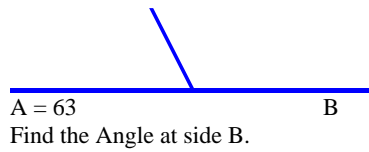
Answer: _____

Name: _____

November 05, 2023



16)



Find the Angle at side B.

Answer: _____

17)

Find the mode of the following set of data:

7, 7, 7, 16, 16, 8, 8, 21, 21, 17, 17

Answer: _____

18) Decrease 206 by $\frac{1}{103}$

Answer: _____

19)

Find the next three numbers in the sequence
36,30,45,39,54,48,63 __, __, __

Answer: _____

20)

Convert the following fraction into a mixed number: $\frac{10}{1}$

Answer: _____

Total: ____ / 20

Name: _____

November 05, 2023

MATHS WORKSHEET

GENERATOR

11-PLUS
SATS
GCSES



Sr: 05112023-3271

Answers:

- | | | | | | | |
|--------------------|--------------------|----------------------|---------|---------------|--------------|--------------------|
| 1) -6 | 2) 8930cm | 3) 47,94,95, | 4) 60 | 5) 60 | 6) 4000 | 7) $3\frac{1}{10}$ |
| 8) 60 | 9) 565.48667764616 | 10) 10 Hours 30 Mins | 11) | 12) 59 | 13) 7^{23} | 14) -12,-12,-16, |
| 15) $2\frac{3}{8}$ | 16) 117 | 17) 7 | 18) 204 | 19) 57,72,66, | 20) 10 | |